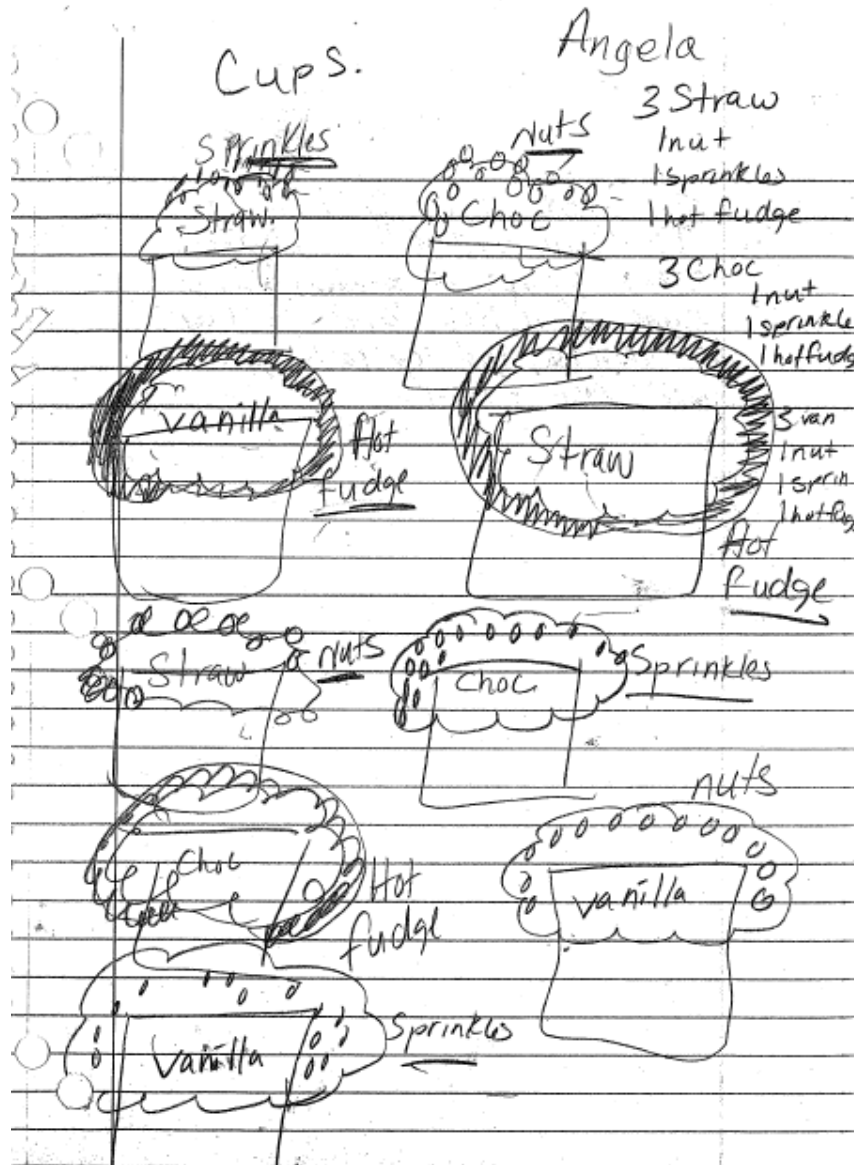


Angela



Angela

I took all 3 flavors of Ice Cream and all 3 toppings. I took 3 cups of Strawberry, 3 cups of Choc, and 3 cups of Vanilla, and top each topping with each flavor.

Jacquia

2-3-14

Cup - Strawberry nuts

strawberry sprinkles



strawberry nuts



strawberry not fudge



vanilla fudge



vanilla sprinkles



vanilla nuts



choc fudge



choc sprinkles

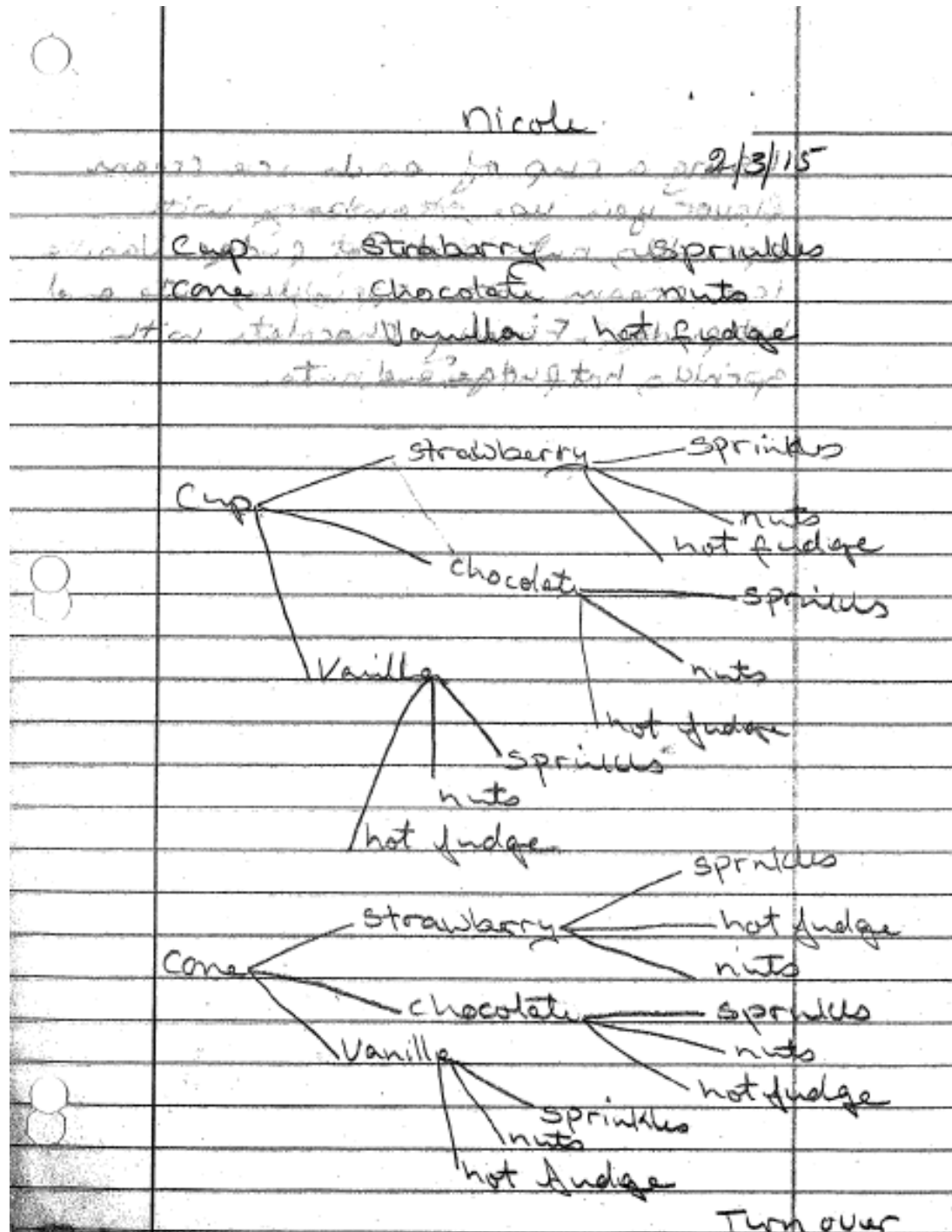


choc nuts



I took all three flavors of the ice cream and the toppings, I tried 3 different ways in each ice cream to see what I could combine in my conclusion I came up with 9 different ways using the toppings on each flavor.

Nicole



Nicole

Using a cup of each ice cream flavor you use, strawberry with sprinkles, nuts and hot fudge. Vanilla ice cream with sprinkles, nuts and hot fudge. Finally chocolate with sprinkles, hot fudge and nuts.

Jessica

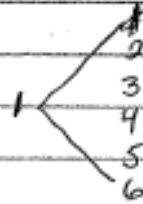
Jessica

2-3-15

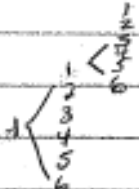
How many different combinations of numbers can you get if you roll 2 dice

one side has 6 possible combos.

6 sides  
 $\times$  6 Combos  
~~36~~ ~~Combos~~  
36 Combos



3 dice



one side has 36 possible combos

$\times$  36 Combos  
36 sides  
216 Combos

$$\begin{array}{r} 3 \\ \times 36 \\ \hline 216 \end{array}$$